






**SANT NIRANKARI PUBLIC SCHOOL
NIRANKARI COLONY
CLASS – III
SESSION 2021-22
SUBJECT – ENGLISH
WORKSHEET – 1**

Chapter 6 – Nouns


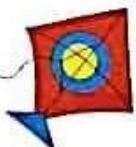





LET US REVISE: Names of persons, animals, places and things are called nouns. Examples: Ravi, tiger, New Delhi, gold

Exercise

Q1. Look at the following pictures and find their names in the grid given below:

| | | | | | | |
|---|---|---|---|---|---|---|
| A | B | O | O | K | R | S |
| B | O | F | K | I | N | K |
| C | Y | G | L | T | X | W |
| D | E | T | M | E | G | G |
| G | I | R | L | B | A | R |
| O | H | E | N | C | F | A |
| A | I | E | O | D | A | S |
| T | J | Q | M | A | N | S |

Q2 .Match the following groups of words in column (1) with words in column (2) :

Column 1

1. table, chair, cupboard, bookshelf
2. Kanpur, Delhi, Bhopal, Mumbai
3. Sachin, Sehwag, Dhoni, Virat Kohli
4. apples, oranges, grapes, bananas, pineapples
5. dog, cat, lion, tiger, deer
6. brinjal, potato, tomato, cabbage, cauliflower
7. English, Hindi, Maths
8. pencil, eraser, sharpener, pen
9. swallow, pigeon, peacock, cuckoo
10. lily, sunflower, rose, poppy

Column 2

- (a) fruits
- (b) furniture
- (c) animals
- (d) players
- (e) places
- (f) subjects
- (g) birds
- (h) flowers
- (i) stationery
- (j) vegetables

Q3. Look around in your home .Write three nouns that you see.One has been done for you.

- i)bed
- ii)
- iii)
- iv)

Q4. Guess who I am. One has been done for you.

- i) I mend your shoes. Cobbler
- ii) I look after you when you are sick. _____
- iii) I teach you in school. _____
- iv) I stich your clothes. _____

SANT NIRANKARI PUBLIC SCHOOL
NIRANKARI COLONY
CLASS – III
SESSION – 2021-22
SUBJECT – ENGLISH
WORKSHEET – 2

Chapter 6 – Nouns

Nouns

Nouns are the words that names people, place, animal and things. Around us we see so many things. Everything that we see has some name. **Example:** computer, blackboard, chalk, book, teacher etc.

Q1.

Look at these pictures and write (P) for persons, (Pl) for places, (T) for things and (A) for animals, in the boxes provided beside the pictures.



birds

2.



tiger

3.



dress

4.




ice cream

5.



Raman

6.



park

7.



doctor

8.



shoes

9.



library

10.



teacher

Q2.

Circle the *nouns* in the following sentences.

1. Manya studies in my school.
2. Two girls are absent today.
3. This pen has no ink.
4. The doctor gave him medicine.
5. Our classroom is very big.
6. The tortoise defeated the hare.
7. The market is near my house.
8. Vivan is a naughty boy.
9. The boys are playing in the garden.



Q3. Fill in the blanks with suitable nouns from the box. One has been done for you.

| |
|--|
| teacher – dog – doctor – father – milkman – grandmother |
|--|

1. I was not well so I went to a doctor.
2. My _____ is old and walks with a stick.
3. Our _____ told us to open the English grammar books.
4. The _____ forgot to give us milk today.
5. I have a pet _____ that barks at strangers.
6. My _____ drops me to the school
everyday.

संत निरंकारी पब्लिक विद्यालय
निरंकारी कॉलोनी
विषय - हिंदी
कक्षा - तृतीय

रिमझिम

पृष्ठ - 3

कार्यपत्रक - 1 (सप्ताह-3) महीना-जून

(चौद वाली अम्मा)

प्रश्न-① आसमान को क्या सुझती है ?

(i) नादानी ☐ (ii) शरारत ☐

(iii) मस्ती ☐ (iv) चालाकी ☐

प्रश्न-② दौड़ मेरा झाड़ू किसने कहा ?

(i) दादी ने ☐ (ii) पापा ने ☐

(iii) अम्मा ने ☐ (iv) दादा ने ☐

प्रश्न-③ अम्मा आँगन में क्या लगाती है ?

(i) पानी ☐ (ii) बर्तन ☐

(iii) झाड़ू ☐ (iv) कपड़े ☐

प्रश्न-④ आसमान ने अम्मा को कहाँ दौड़ दिया ?

(i) बादल पर ☐ (ii) तारों पर ☐

(iii) चाँद पर ☐ (iv) सूरज पर ☐

प्रश्न-⑤ अम्मा अपना खाना खुद बनाती थी। आपके घर में खाना कौन बनाता है ?

(i) दादा जी ☐ (ii) पापा जी ☐

(iii) माता जी ☐ (iv) भैया ☐

संत निरंकारी पब्लिक विद्यालय
निरंकारी मॉडर्न

रिमझिम

विषय - हिंदी

कक्षा - तृतीय

महीना - जून

पाठ - 3

(चौद वाली अम्मा) वार्चपत्रक - 2

प्र० ① नीचे लिखे शब्दों के अर्थ लिखो -

शब्द - अर्थ

- (i) शरारत - _____ (v) कसकर - _____
(ii) परेशानी - _____ (vi) बार किया - _____
(iii) देड़ा - _____ (vii) सहित - _____
(iv) आव देखा न ताव - _____ (viii) झट - _____

प्र० ② तुम कौन - से काम करते हो ? अपने कामों के बारे में लिखो -

| उ० | घर के काम | घर से बाहर के काम |
|----|-----------|-------------------|
| | | |

SANT NIRANKARI PUBLIC SCHOOL
CLASS- III
SUBJECT – MATHEMATICS
WORKSHEET-4 : (JUNE)

1. Find the sum of the given numbers.

- a) 3632 and 5766
- b) 5109 and 4810
- c) 1752 and 7534
- d) 8234 and 4999

2. Find the actual sum and the estimated sum by rounding off

a) Round off to the nearest ten.

| T | O | | T | O |
|---|---|---|---|---|
| 5 | 5 | → | | |
| 3 | 1 | → | | |
| | | | | |

b) Round off to the nearest hundred.

| Th | H | T | O | | Th | H | T | O |
|----|---|---|---|---|----|---|---|---|
| 4 | 2 | 1 | 5 | → | | | | |
| 2 | 7 | 8 | 7 | → | | | | |
| | | | | | | | | |

a) Round off to the nearest thousand.

| Th | H | T | O | | Th | H | T | O |
|----|---|---|---|---|----|---|---|---|
| 7 | 1 | 2 | 7 | → | | | | |
| 1 | 6 | 5 | 4 | → | | | | |
| | | | | | | | | |



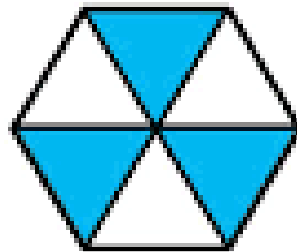
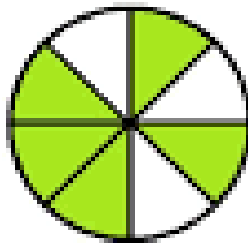

- 3.** A fruit seller has 1312 mangoes and 149 apples. How many fruits does he have in all?
- 4.** At a mathematics competition, the girls scored Rs 1592 and his sister spent Rs 5923. Find the estimated sum of money they spent.
- 5.** Jatin travelled 4600 Km in June. He travelled 1653 km more in July. How far did he travel in July?

SANT NIRANKARI PUBLIC SCHOOL
CLASS- III
SUBJECT – MATHEMATICS
TOPIC - FRACTION
WORKSHEET- 5 (JUNE)

Q 1 .Fill in the blanks -

- 1) A whole can be divided into any number of equal or _____ parts .
- 2) A fraction is made up of _____ parts .
- 3) _____ is the top part and denominator is the bottom part of Fraction .

Q 2. What fraction of each figure is shaded ?



CLASS III
SUBJECT – EVS
WORKSHEET-1 JUNE
TOPIC – CHILDREN AT WORK

- A. Tick the names of the places where you have seen children working.
1. Restaurants
 2. Tea stalls/dhabas
 3. Car workshops
 4. Houses
 5. Schools
 6. Factories
 7. Cinemas
 8. Constructions
- B. Choose the correct answers.
1. Which of these jobs involves child labour?
 - a) Working at a tea stall
 - b) Working in a mine
 - c) Both a and b
 2. Which of these organizations fight against child labour?
 - a) UNICEF
 - b) UNESCO
 - c) Educate Girls
 3. It is illegal to employ children under what age?
 - a) 12 years
 - b) 16 years
 - c) 14 years
 4. What is the name of the government scheme under which children in schools are given food?
 - a) Free education
 - b) Free uniform
 - c) Midday meal
 5. Which of these jobs are done by children?
 - a) Washing dishes
 - b) Sweeping
 - c) Both a and b

CLASS III

SUBJECT – EVS

WORKSHEET-2 JUNE

TOPIC – CHILDREN AT WORK

A. Answer the following questions

1. Name some different types of work who help us.
2. Define child labour.
3. Give full form of CRY and UNICEF.
4. Children should help their family with small task. Name some tasks in which you can help your family.
5. What is the age limit to get compulsory education under the Right to Education Act?

CLASS III
SUBJECT – EVS
WORKSHEET-3 JUNE
TOPIC – CHILDREN AT WORK

A Tick the correct answers.

1. Your grandfather wants your help to bring his medicine box from his room. What will you do?
 - a. Continue playing
 - b. Bring him his medicine box
2. Your mother comes home tired from office. What will you do to show your love?
 - a. Jump on the sofa
 - b. Bring her a glass of water
3. Your father needs your help in picking up the dishes from the table after dinner. What will do?
 - a. Carry the plates to the kitchen
 - b. Run to watch your favourite TV show
4. Your grandmother wants to go for an evening walk to the park and would like you to go with her. What will you do?
 - a. Make an excuse that you have lots of homework
 - b. Go with her
5. Your Brother is having fever and needs rest. What will you do?
 - a. Sit in another room quietly and read your book
 - b. Watch television on high volume