

**SANT NIRAN KARI PUBLIC SCHOOL**  
**CLASS VII**  
**WINTER HOLIDAY HOME WORK**

<b>S.NO.</b>	<b>SUBJECT</b>	<b>HOLIDAY ASSIGNMENT</b>	<b>AIL</b>
1	ENGLISH	ASSIGNMENT-I ASSIGNMENT-II	In the chapter named 'The Bear Story', the lady brought the bear's cub from the forest who was found half dead with hunger there. This act of hers shows her sensitivity and kindness towards animals. Now, draw and colour a picture that shows any act of kindness that you have shown towards animals in your daily life. Do this work on an A4 sized sheet .Also, write a slogan for the drawn picture on the same sheet.
2	HINDI	पी डी एफु द्वारा दे दिए जाएँगे ।	भारत के विभिन्न राज्यों के प्रसिद्ध व्यंजनों के विषय में इंटरनेट से जानकारी एकत्रित करके एक सुंदर समुचित चित्र तैयार कीजिए । (05) अंक
3	MATHS	ASSIGNMENT-I ASSIGNMENT-II (Submit in PDF form)	Show the symmetry in the alphabets of your name on A4 size sheets Show the reflection symmetry of any two 2D figure in your surroundings
4	SCIENCE		TOPIC : Make a : Periscope OR Kaleidoscope Also, write its construction, working and applications of the device.
5	SOCIAL SCIENCE		On A-4 sheet, write the names and paste pictures of some

			monuments found in the pink city, Jaipur founded by Sawai Raja Jai
			प्रतिदिनं भवन्तः अनेकेषां वाक्यानां प्रयोगं कुर्वन्ति । तेषु वाक्येषु अव्ययपदानाम् अति प्रयोगः भवति । 10 अव्ययपदानि चित्वा संग्रहणं कुरुत एवंलिखत च ।
7	COMPUTER	ASSIGNMENT-I ASSIGNMENT-II (PDF will submitted )	On A4 sheet neatly draw icons or logos of B2C and C2C E-commerce websites .e.g.Myntra, OLX

8	DRAWING	Make a portrait of a Freedom fighter On A3 size ivory sheet .	
---	---------	---	--

**SANT NIRANKARI PUBLIC SCHOOL**  
**Holiday Homework**  
**CLASS VII(SESSION : 2021-22)**  
**ASSIGNMENTS**

**ENGLISH**

**HOLIDAYS HOMEWORK**

**GRAMMAR : IDIOMS AND PROVERBS**

**ASSIGNMENT - I**

Q1. Complete the following idiomatic expressions and use them in sentences of your own.

1. to look \_\_\_\_\_

\_\_\_\_\_

2. to spill the \_\_\_\_\_

\_\_\_\_\_

3. to eat like \_\_\_\_\_

\_\_\_\_\_

4. on cloud \_\_\_\_\_

\_\_\_\_\_

5. at the eleventh \_\_\_\_\_

\_\_\_\_\_

6. to make up \_\_\_\_\_

\_\_\_\_\_

7. to pass \_\_\_\_\_

\_\_\_\_\_

8. to drop

\_\_\_\_\_

9. in black and \_\_\_\_\_

\_\_\_\_\_

10. without rhyme \_\_\_\_\_

\_\_\_\_\_

Q. Add words and complete the following proverbs.

1. A stitch in time \_\_\_\_\_
2. A rolling stone \_\_\_\_\_
3. Honesty \_\_\_\_\_
4. Where there is \_\_\_\_\_
5. Necessity is \_\_\_\_\_
6. Haste \_\_\_\_\_
7. Empty vessels make \_\_\_\_\_
8. The early bird \_\_\_\_\_

**ENGLISH**  
**HONEYCOMB**

**ASSIGNMENT-II**  
**A BICYCLE IN GOOD REPAIR**

**The Bicycle Ride**

One of the friends of the author suggested that the two should go for a bicycle ride the next day. The author reached the place half an hour before his friend and was waiting for him in the garden. The author's friend inquired about his bicycle and then gave it a shake holding its front wheel and the fork. After a while, the man took out the front wheel of the cycle while the author was away for a while looking for a hammer.

**The Bicycle Inspection and its Repair Work**

The author insisted on putting on the various parts of cycle in place, but his friend wanted to check the front wheel. He unscrewed something and from somewhere around a dozen ball bearings came out. His friend insisted that the author must collect all of them else the bicycle might not be restored to its old condition. The author collected around 16 of them and kept them in his hat. The author's friend now started taking off the gear-case. The author warned him not to mess up with the gear-case, but his friend said that nothing is as easy as taking off the gear-case. He took it off easily, but had a nightmare while fixing it back to its place. His bicycle which was until now in good condition was now lying scattered and divided in many parts. Author wanted to stop his friend from causing further troubles, but he admits that he is weak at hurting others. Then, it was the time for the chain which he tightened to an extent that it stopped moving. He then loosened it until it became twice as loose as it was before.

**Hard work to collect the parts**

After applying his tricks on the cycle, author's friend seemed to be contented and now wanted to put all the pieces back to their place. It took a lot of time and a great effort. The process revealed that his friend was inexperienced and knew nothing about repairing a bicycle. After struggling for many hours, his friend was able to somehow fix the different parts of the bicycle. The author took him to his back kitchen where his friend cleaned himself and then the author sent him back to his home.

**Q. Answer these questions briefly.**

1. Where did the author plan to go along with his friend?
2. Which was the part of the bicycle that the author's friend found the toughest to fix?

3. How did the author and his friend spend the entire day?
4. How did the author encourage his friend to fix the gear-case?
5. What was the state of the author's friend at the end?

हिंदी (कार्यपत्रिका - 1)

निर्धारित समय :- 40 मिनट

(लेखन खंड पर आधारित)

प्रश्न 1. निम्नलिखित में से किन्हीं दो विषयों पर अनुच्छेद लिखिए :-

- (क) मेरा भारत अतुलनीय भारत
- (ख) मेरा प्रिय व्यक्ति
- (ग) समाचार पत्रों का महत्व
- (घ) लॉकडाउन में बदलता परिवेश
- (ङ) कोरोना के बाद का जनजीवन

प्रश्न 2. अपने क्षेत्र में बढ़ते हुए अपराधों की शिकायत करते हुए क्षेत्र के थानाध्यक्ष को एक पत्र लिखिए।

प्रश्न 3. भारत को आत्मनिर्भर बनाने हेतु सरकार के साथ जनता को कदम से कदम मिलाकर चलने का आह्वान करने हेतु भारत सरकार की ओर से एक आकर्षक विज्ञापन जनहित में जारी कीजिए।

कार्यपत्रिका - 2 निर्धारित समय :- 20 मिनट

(अपठित अंश पर आधारित)

निम्नलिखित गद्यांश को ध्यानपूर्वक पढ़कर दिए गए विकल्पों में से सही विकल्प चुनिए :-

सच्चे मित्र की तलाश हर व्यक्ति को रहती है। जब कोई व्यक्ति जीवन में कठिनाइयों से दो-चार होता है, तो उसे किसी ऐसे साथी की आवश्यकता महसूस होती है, जो उसके दुख और परेशानियों की गाथा सुने और उनके निराकरण में उसकी सहायता करे। परंतु सच्चा मित्र पाना अत्यंत कठिन है। हर जान-पहचान वाला व्यक्ति हमारा मित्र नहीं हो सकता और न ही मित्रता का दावा करने वाला व्यक्ति सच्चा मित्र होता है। मित्रता सदैव सोच-समझकर करनी चाहिए। मीठी बातें, चाटुकारिता, हँसमुख चेहरा आदि मित्र बनाने के लिए आवश्यक शर्तें नहीं हैं, वरन् सच्ची बात कहने वाला, खरी बात कहने वाला। विपरीत परिस्थितियों में साहस बढ़ाने वाला ही सच्चा मित्र हो सकता है। आचार्य शुक्ल ने सच्चे मित्र को कड़वी दवा की भाँति बताया है, जो कुसंग के ज्वर को दूर कर देती है। हमारे जीवन का मार्ग कुमार्ग न बन जाए, सफलता असफलता न बन जाए और नैकनामी बदनामी न बन जाए, इसके लिए हमें बुरे मित्रों और उनकी संगति से दूर ही रहना चाहिए।

प्रश्नाभ्यास

प्रत्येक व्यक्ति को किसकी तलाश रहती है?

- (क) किसी भी मित्र की
- (ख) हँसमुख व्यक्ति की
- (ग) सच्चे मित्र की
- (घ) चाटुकारिता की

(ii) सच्चा मित्र विपरीत परिस्थितियों में क्या करता है?

(क) साहस बढ़ाता है (ख) हतोत्साहित करता है

(ग) तटस्थ हो जाता है (घ) हँसता रहता है

(iii) कुसंग के ज्वर को दूर कौन कर देती है?

(क) किसी व्यक्ति की सहानुभूति (ख) सच्ची मित्रता

(ग) निष्पक्षता (घ) हमारी सफलता

(iv) 'मित्रता सदैव सोच-समझकर करनी चाहिए।' अर्थ की दृष्टि से वाक्य का कौन-सा भेद है?

(क) प्रश्नवाचक (ख) नकारात्मक (ग) विधानवाचक (घ) आज्ञार्थक

(v) नेकनामी को बदनामी से बचाने के लिए हमें क्या करना चाहिए?

(क) किसी मित्र से परामर्श लेनी चाहिए.

(ख) बुरे मित्रों एवं उनकी संगति से दूर रहना

चाहिए

(ग) नेकनामी का प्रचार करना चाहिए

(घ) विपरीत परिस्थितियों में धैर्य रखना

चाहिए

## MATHS

### ASSIGNMENT 1

Q 1 We want to show that triangle ART Is congruent to triangle PEN using SSS criteria we have  $TR = NE$  and  $RT = EN$ . What more do we need to show?

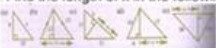
Q 2 We want to show that triangle ART Is congruent to triangle PEN using SAS criteria we have ,  $AR = PE$  and angle  $T = \text{angle } N$  , What more do we need to show?

Q 3 We want to show that triangle ART Is congruent to triangle PEN using ASA criteria we have  $AT = PN$  and angle  $A = \text{angle } P$ . What more do we need to show?

### ASSIGNMENT 2


1. |

Find the length of x in the following figures:




2.

Given below are pairs of congruent triangles. Using SSS congruence condition, find the length of the unknown side. Also name the congruent triangles in symbolic form.




3.

Find the measurement of unknown side or angle in the following pairs of congruent triangles.



4.

In the following pairs of triangles, measurements of some elements are given. State which pair of triangles is not congruent:



## SCIENCE

## CHAPTER : 16 SOIL

### ASSIGNMENT : 1

#### Question 1

- a. Polythene bags & \_\_\_\_\_ pollute the soil.
- b. \_\_\_\_\_ horizon is made up of small lumps of rocks with cracks & crevices.
- c. \_\_\_\_\_ in a soil helps plant roots to breathe.
- d. \_\_\_\_\_ soil has maximum percolation rate.
- e. \_\_\_\_\_ soil has maximum water holding capacity.
- f. \_\_\_\_\_ soil is deposited by fast-flowing rivers.
- g. \_\_\_\_\_ soil have smallest soil particles.
- h. \_\_\_\_\_ is mixed with clayey soil to improve its texture & fertility.
- i. Percolation rate of water in soil is expressed as \_\_\_\_\_
- j. Use of pesticide should be \_\_\_\_\_ to reduce soil pollution.

#### Question 2

Explain

- (a) weathering
- (b) soil
- (c) Horizons
- (d) Soil profile

### ASSIGNMENT : 2

Answer the following short questions:

- a. Soil is an inseparable part of our life. Justify
- b. How soil get polluted? How it can be prevented?

- c. What is humus? What role it plays in soil?
- d. What is composition of soil? Enlist the climate factors which affect soil profile.
- e. Size of soil particles have important influence on property of soil. Classify the soil correlating with size of soil particles.
- f. List down the climate factors which affect soil profile.
- g. Why erosion of soil is more severe in deserts or bare lands?

## **Social Science**

### **Assignment 1**

Fill in the blanks

- 1. The branches of trees from a thick canopy in \_\_\_\_\_ Forest.
- 2. In the USA, the season when forest trees shed their leaves is called\_\_\_\_\_.
- 3. People who were subjugated by the rules were called\_\_\_\_\_.
- 4. \_\_\_\_\_ are one the main tribes in Assam and North-East India.
- 5. All the social evils in society from early times have been related to \_\_\_\_\_.
- 6. The main area of Temperate Evergreen Forests are and \_\_\_\_\_ and \_\_\_\_\_.
- 7. Vaishnavas are \_\_\_\_\_ saints and devotees to lord Vishnu.
- 8. Ganga-Bharmputra basin has a rich layer of \_\_\_\_\_ Soil.
- 9. The large tribes of \_\_\_\_\_ spread across western and central India.
- 10. The Sufi saints believed in the principles of the \_\_\_\_\_.

Write True or False

- 1. Trains run at slow speed due to electrification.
- 2. In the Rural areas, The parents of girl's child are still reluctant to spare them for schooling



3. The Nathpanthis composed three types of literature.
4. The Gonds mainly practiced shifting cultivation.
5. In Andhra Pradesh, there are 37 kinds of tribes.
6. Women are paid more than men for the same kind of work.
7. The government has declared dowry as illegal.
8. Mirabai keeps the idol of Rama with her.
9. The rulers of Assam competed with Ahoms for control over the Bhamputra Valley.

## **Assignment 2**

Answer the following question

1. What is Bio- Diversity?
2. Why was Suraj Mal important to the Mughals?
3. Give a brief note on some social reformers who work for women equality and rights.
4. Write a short note on Kabir's teachings.
5. Why Rajput called heroes?
6. Classify the urban settlements on the basis of functions.
7. Waterways are important for trade. How?
8. Write a note on Wildlife found in the Amazon basin.
9. Explain the life of the people who live in the Amazon basin.

10. What kind of climate is found in the Ganga Brahmaputra basin?

SANSKRIT

संत निरंकारी पब्लिक विद्यालय  
दिसंबर सप्ताह - 5 (कार्यपत्रक-1)  
विषय- संस्कृत (कक्षा-7)

समय अवधि:- 20 मिनट

प्रश्न-1 दिनद्वस्य अवकाशार्थं लिखितं पत्रं मञ्जूषायां प्रदत्तशब्दैः पूरयत-  
मान्याः प्रधानाचार्या महोदया,  
संत निरंकारी पब्लिक विद्यालय,  
दिल्ली नगरम्

तिथि:.....

(I).....

सविनयं (II) .....

..... यत् गत- रात्रौ अहं(III)..... आक्रान्तः आसम्। अहम् विद्यालयम् आगन्तुम् असमर्थः अस्मि। अतः

दिनद्वस्य (IV)..... प्रदाय माम् (V) .....

भवताम् आज्ञाकारी शिष्यः

दीपेश

मञ्जूषा

अवकाशम् अनुग्रहणात् प्रार्थये

रोगेण आदरणीयः

प्रश्न-2 विलोमपदानि मेलयत् -

1. नीचैः पर्याप्तम्

2. पुरातनम् उच्चैः

3. अपर्याप्तम् नूतनम्

दिसंबर सप्ताह - 5 (कार्यपत्रक-2)

विषय- संस्कृत (कक्षा-7)

समय अवधि:- 20

स्थानानि पूरयत-

(1) अहम् .....। खादामि/खादसि।

(2) वयम् .....। पठासि/पठामः।

(3) सः .....। चलतः, चलति।

(4) ते .....। पचति, पचन्ति।

(5) आवाम् .....। चलाव, चलामः।

प्रश्न-2 चित्रं दृष्ट्वा मञ्जूषातः पदानि च प्रयुज्य वाक्यानि रचयत-

(धारयन्ति, बालाः गृहम्, वर्षाः, जलम्, ते  
वृक्षाः, सरोवरः, बादलः, बालिका,

बालकः,बादलः)



**Computer**

**ASSIGNMENT-1**

**WEEK-5**

**TOPIC: Mobile App Development**

1. Define M Commerce.
2. What is a mobile app?
3. Write any two features of Mobile app.
4. Name some type of Mobile apps.

**Computer**

**ASSIGNMENT-2**

**WEEK-5**

**TOPIC: Mobile App Development**

1. Give 5 examples of
  - Gaming Apps
  - Educational Apps
  - Business Apps
2. Name two popular app developer utilities.